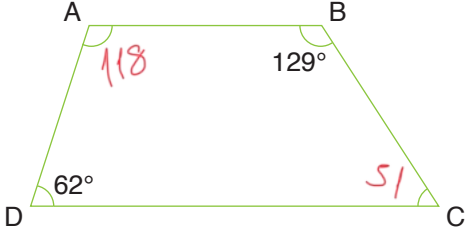


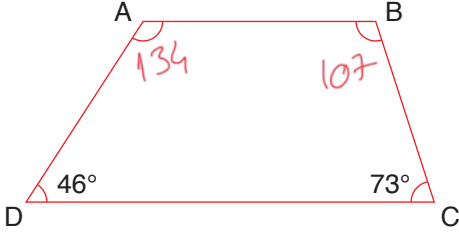
ÇÖZÜMLER

1.



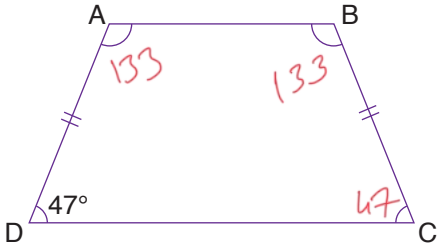
Yukarıdaki ABCD yamuğunda verilmeyen açıları bulunuz.

2.



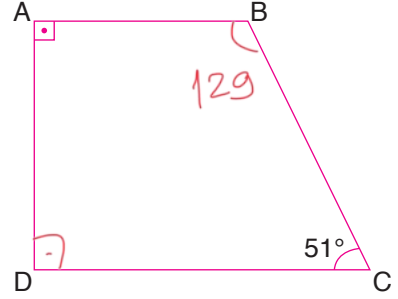
Yukarıdaki ABCD yamuğunda verilmeyen açıları bulunuz.

3.



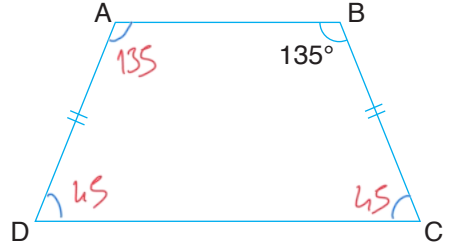
Yukarıdaki ABCD yamuğunda verilmeyen açıları bulunuz.

4.



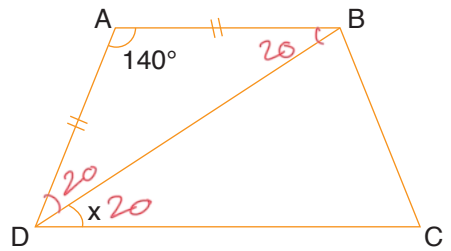
Yukarıdaki ABCD yamuğunda verilmeyen açıları bulunuz.

5.



Yukarıdaki ABCD yamuğunda verilmeyen açıları bulunuz.

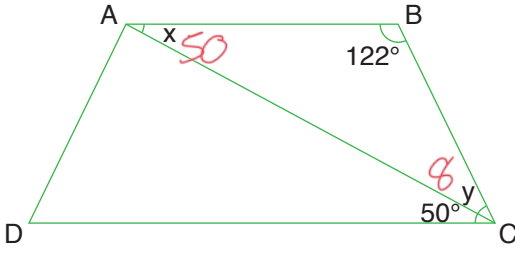
6.



Yukarıdaki ABCD yamuğunda x kaçtır?

20

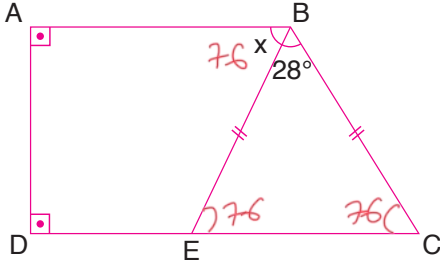
7.



Yukarıdaki ABCD yamuğunda x ve y kaç derecedir?

50 ve 8

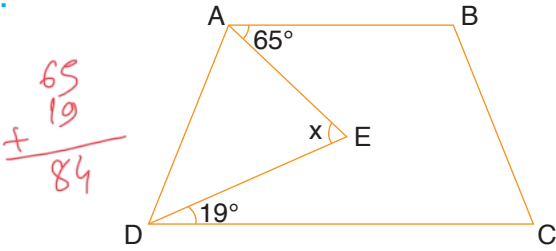
8.



Yukarıdaki şekilde verilenlere göre x kaç derecedir?

76

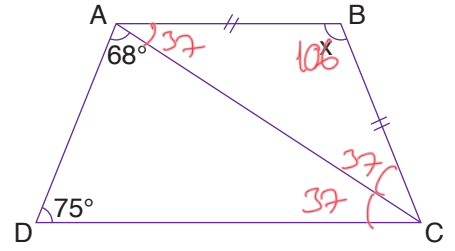
9.



Yukarıdaki ABCD yamuğunda x kaç derecedir?

84

10.

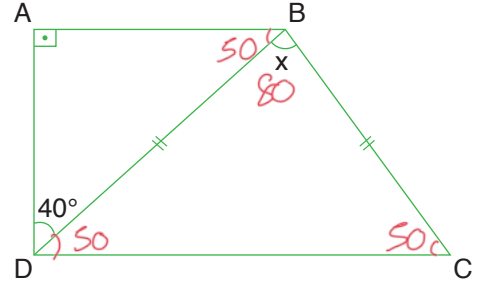


Yukarıdaki ABCD yamuğunda x kaç derecedir?

$$\begin{array}{r} 68 \\ + 75 \\ \hline 143 \end{array} \quad \begin{array}{r} 180 \\ - 143 \\ \hline 37 \end{array} \quad \begin{array}{r} 180 \\ - 74 \\ \hline 106 \end{array}$$

106

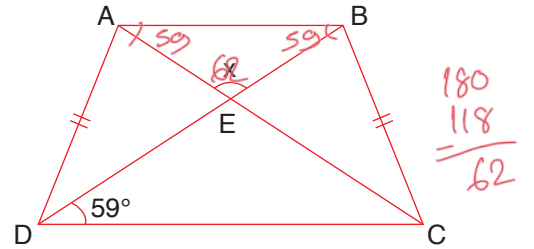
11.



Yukarıdaki ABCD yamuğunda x kaç derecedir?

80

12.



Yukarıdaki ABCD yamuğunda x kaç derecedir?

62

matematiktek